

Zadanie z HN pre 4. ročník 1.časť v týždni od 29.3- 2.4.2021

Vypracuj zadania :

10. Úlohy

Zakrúžkuj intervaly, ktoré sú správne.

č. 5 č. 5 v. 3 v. 3 v. 6 v. 6

č. 4 č. 4 v. 2 v. 2 v. 7 v. 7

Doplň názvy čistých, veľkých a malých intervalov.

Zakrúžkuj intervaly, ktoré sú správne.

v. 6 č. 4 m. 7 č. 5 v. 3 č. 1

m. 3 v. 7 v. 3 m. 2 m. 6 m. 3

14. Úlohy

Zakrúžkuj kvintakord A dur, B dur, E dur, As dur, H dur, Es dur.

Two staves of music. The first staff contains six chords: A major (circled), B major, E major, A minor, B minor, and E minor. The second staff contains six chords: A minor, B minor, A major, B major, A minor, and B minor.

Doplň kvintakord, sextakord a kvartsextakord D dur, F dur, A dur, B dur.

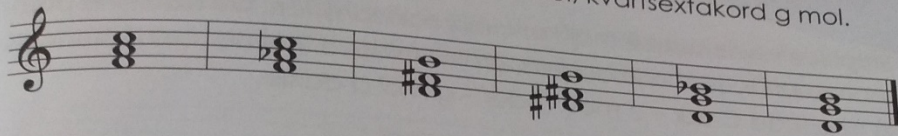
Two empty staves for chord completion. Below each staff are six boxes containing the numbers 5, 6, 6/4, 5, 6, 6/4.

Doplň označenie akordu (5, 6, $\frac{6}{4}$) a urči tóninu.

Výber z týchto tónin: C dur, G dur, D dur, A dur, E dur.

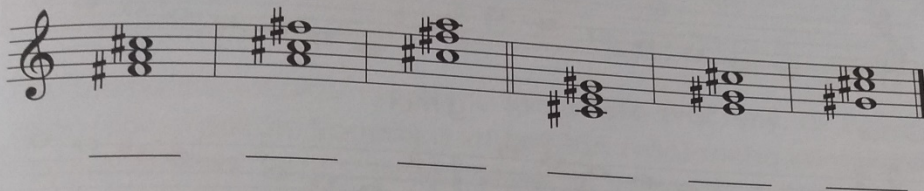
Two staves of music. The first staff contains six chords: A major (circled), B major, E major, A minor, B minor, and E minor. The second staff contains six chords: A minor, B minor, A major, B major, A minor, and B minor.

Zakrúžkuj kvintakord f mol, sextakord h mol, kvartsextakord g mol.



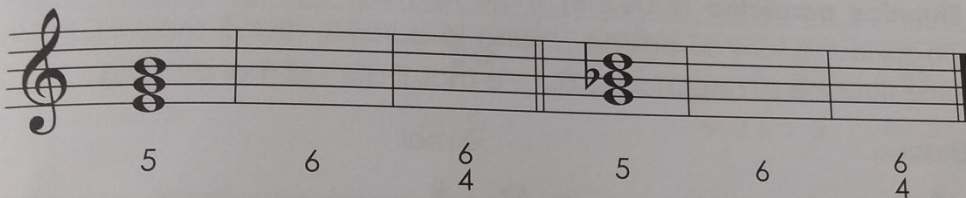
A musical staff in treble clef containing six chords. From left to right: a triad with notes F, A, C; a triad with notes G, B, D; a triad with notes A, C, E; a triad with notes B, D, F; a triad with notes C, E, G; and a triad with notes D, F, A.

Doplň označenie akordu (5, 6, $\frac{6}{4}$) a urči tóninu.




A musical staff in treble clef containing six chords. From left to right: a triad with notes F, A, C; a triad with notes G, B, D; a triad with notes A, C, E; a triad with notes B, D, F; a triad with notes C, E, G; and a triad with notes D, F, A.

Doplň obraty kvintakordu e mol, g mol.



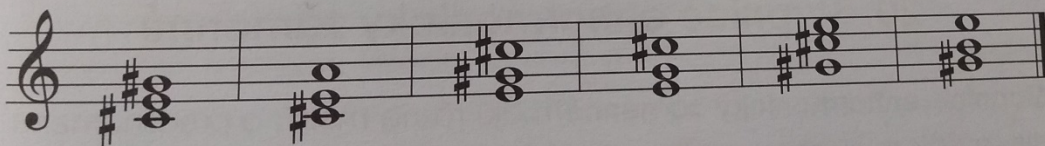
A musical staff in treble clef containing two chords. The first chord is a triad with notes E, G, B. The second chord is a triad with notes G, B, D. Below the staff, the numbers 5, 6, $\frac{6}{4}$, 5, 6, $\frac{6}{4}$ are written under the first and second chords respectively.

Zakrúžkuj kvintakord, sextakord a kvartsextakord f mol.



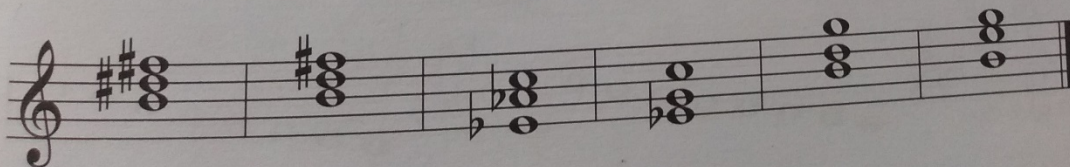
A musical staff in treble clef containing six chords. From left to right: a triad with notes F, A, C; a triad with notes G, B, D; a triad with notes A, C, E; a triad with notes B, D, F; a triad with notes C, E, G; and a triad with notes D, F, A.

Zakrúžkuj kvintakord, sextakord a kvartsextakord cis mol.



A musical staff in treble clef containing six chords. From left to right: a triad with notes C, E, G; a triad with notes D, F, A; a triad with notes E, G, B; a triad with notes F, A, C; a triad with notes G, B, D; and a triad with notes A, C, E.

Zakrúžkuj kvintakord h mol, sextakord c mol, kvartsextakord e mol.



A musical staff in treble clef containing six chords. From left to right: a triad with notes A, C, E; a triad with notes B, D, F; a triad with notes C, E, G; a triad with notes D, F, A; a triad with notes E, G, B; and a triad with notes F, A, C.